

## Y4 Home Learning

### Friday 12th June 2020

#### **Task 1 English –**



#### **Description challenge**

Can you make a list of adjectives to describe the stadium as it looks today?

Can you make a list of adjectives to describe what it used to look like?

Can you write a short paragraph to describe the stadium as it used to look, and another to describe how it looks now?

#### **Finish the story**

This place had once been filled with noise, thousands upon thousands of excited fans cheering as they applauded 'the beautiful game' being played in front of them.

#### **Reading**

Either read your book, select an e-book from Oxford Owl or Bug Club and read for at least 20 minutes.



**Maths**

The children of Dove Primary School have their sports day today. They are all really excited!

The teachers want to put them into teams. There are 498 children in the school.

Use short division to work out the answers to these problems.

1. How many teams will there be if they are sorted into teams of 3 children? \_\_\_\_\_

Will there be any children left who are not in a team of 3? \_\_\_\_\_

2. What if they are sorted into teams of 4 children? \_\_\_\_\_

Will there be any children left who are not in a team of 4? \_\_\_\_\_

3. What if they are sorted into teams of 6 children? \_\_\_\_\_

Will there be any children left who are not in a team of 6? \_\_\_\_\_

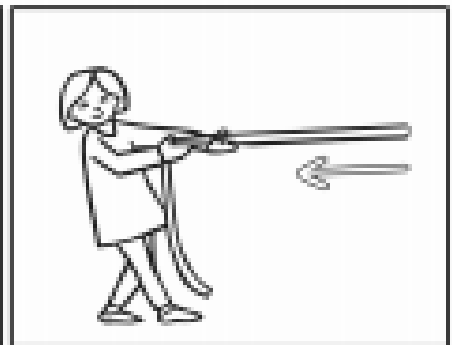
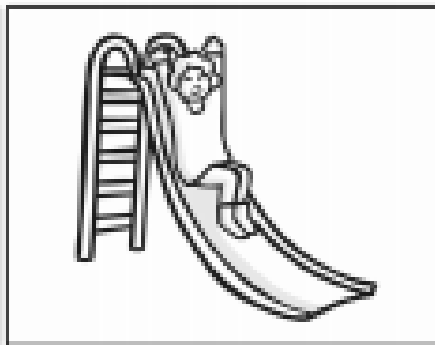

4. What if they are sorted into teams of 8 children? \_\_\_\_\_

Will there be any children left who are not in a team of 8? \_\_\_\_\_

**Science**

<https://www.bbc.co.uk/bitesize/articles/z6xckmn>

Fill in the table below with examples of friction in the world around you. Use the pictures below to help you.



	High Friction	Low Friction
<b>Useful</b>		
<b>Not Useful</b>		