

Y4 Home Learning Friday 19th June 2020

Task 1 English –



Description challenge

A simile is a way of describing something by comparing it to something else, often using the word "like" or "as."

Can you identify all of the similes in my writing?

Can you think of your own similes to use in your writing?

You could experiment using metaphors, or even personification to make your writing really exciting to read!

Finish the story

This was their favourite time of day to fly. As the glowing, crimson sun dipped down below the vast horizon, retreating to allow night to take its place, the dragons took flight. The sky looked beautiful: wisps of pillow-like clouds seemed to part in front of them as they flexed their powerful wings. Like sails from ancient ships, the wings beat in the dying embers of the sun's fire, embracing what little warmth remained. Thousands of tiny scales that covered the beasts' bodies glistened like rubies in the dazzling light. As they reached full speed, leaving the world far beneath them, they almost grinned as they thought about where they were going. There would be others like them there. It would be paradise...



Task 2 – Handwriting

Erik was a Viking warrior. He sailed in a fast ship

called the Golden Dragon. The ship's figurehead

was a fierce monster carved out of wood and

sails billowed from its tall mast.




Task 3 – Reading

Either read your book, select an e-book from Oxford Owl or Bug Club and read for at least 20 minutes.



Maths

Read the problems and add the answer in your head.

1. Add together 40p, 70p and 30p.
2. What is the total of 15, 19 and 23?
3. Lauren was given some money for her birthday. Her brother gave her £2.50, her sister gave her £1.00 and her grandma gave her £4.50. How much did she get in total?

4. Omar collects 68 bus tickets and 34 train tickets. How many tickets does he have in total?

5. Caroline has 2 bags of apples. One bag has 13 red apples in and the other bag has 24 green apples. How many apples does she have in total?
6. What is the sum of 38, 20 and 87?

7. Samir buys three chocolate bars. A Mars that cost 62p, a Snickers that cost 59p and a Milky Way that cost 70p. How much did he spend in total?
8. A teacher gives out 16 pencils on Monday, 22 on Tuesday and 29 on Thursday. How many pencils did she give out in total?
9. How much is 84p plus 39p plus 47p?
10. Three sacks of potatoes were delivered to a shop. They weighed 18kg, 35kg, 27kg. How much did they weigh in total?

History

What is Stonehenge?

<https://www.bbc.co.uk/bitesize/articles/zv67mfr>

Activity 1

Create a fact file on Stonehenge.

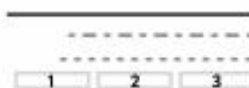
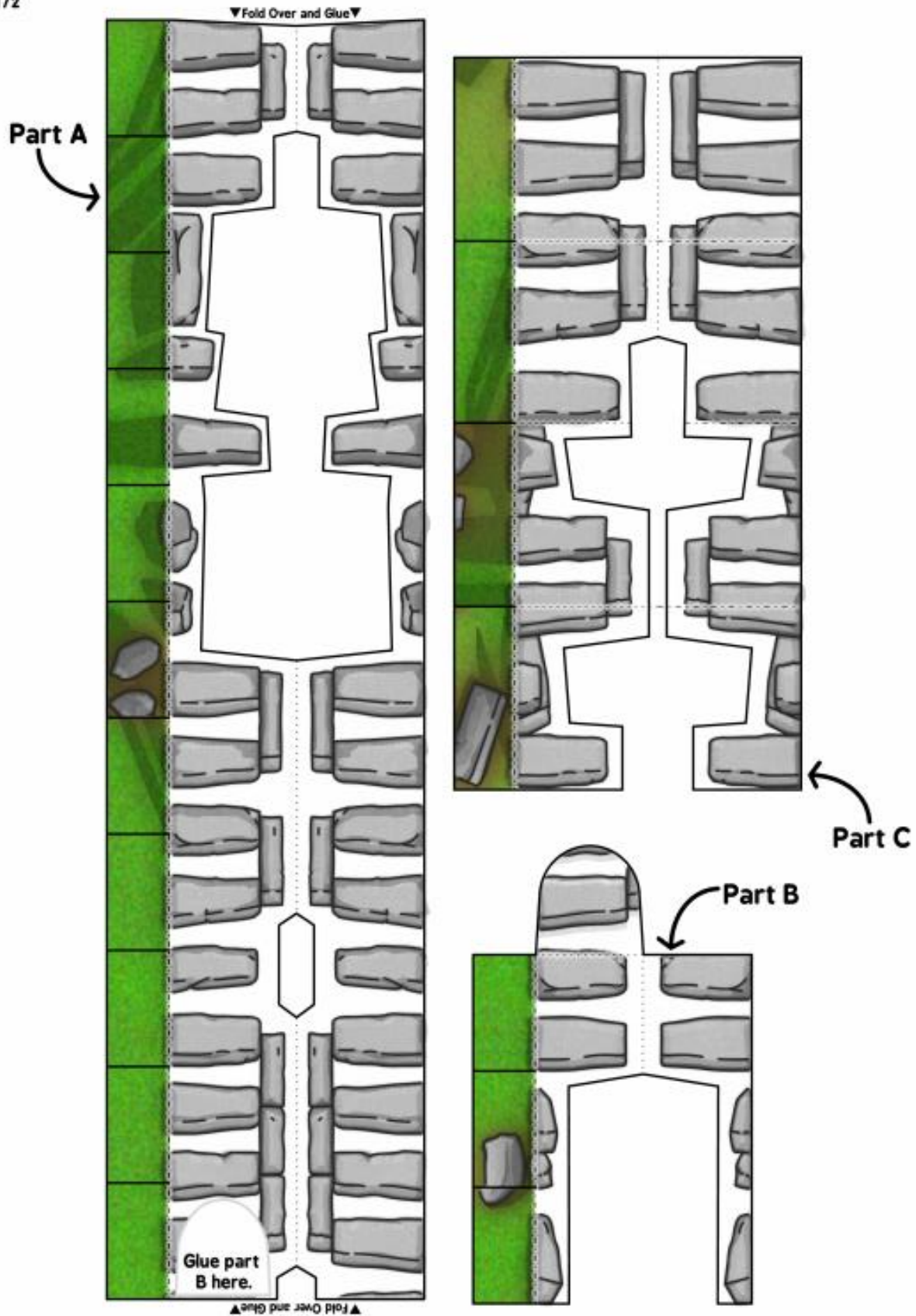
Activity 2

Make your very own Stonehenge. You will need scissors and glue.



Stonehenge Paper Model

Page 1/2



Stonehenge Paper Model
Page 2 / 2

