

Monday 25th January 2021

Morning Job – How many words (synonyms) can you find which mean the same as happy?

Timetable for 25th January 2021

9am Register

9:15 – 9:30 Spellings

9:30 – 10:30 English

10:30 – 10:45 Break

10:45 – 11:45 Maths

11:45 – 12:00 Reading

12:00 – 1:00 Lunch

1:00 – 2:00 RE

2:00 – 3:00 PE

Spellings

[Http://www.ictgames.com/mobilePage/spookySpellings/index.html](http://www.ictgames.com/mobilePage/spookySpellings/index.html)

Year: 1 2 3 & 4 5 6

Choose a year group, then choose a book from the shelf. Each book has a different list of words.

Spooky Spellings
This is a spelling game. The words used are sometimes called 'Tricky Words', 'Red Words' or 'Common Exception Words'. They are common words which are hard to spell. The lists of words are taken from the UK National Curriculum.

go

To express an opinion about poems.

Sitting on a branch eating –
Red berries, yellow,
Red breast, singing all alone.

What do think about this poem?

Silent flakes falling –
White wonderland like icing,
Sparkling, blanket covered land.

What do you notice?

Footsteps leading us to where?

Carrot nose, coal mouth ...

A new friend stands before us.

Does the poem actually say thenoun it is written about?

Cracks! Splintering the surface –
Frozen shards of ice,
What lies beneath? SPLASH!

Does this poem link to the others?

We watch dancing, crackling, warmth –
Red, orange, yellow,
Sweet marshmallows' toasting.

What do you think?

Haiku

These poems are called Haiku. The form originated in Japan.

They are simple: they tell something about a moment in time, usually taken from a real experience in nature.

There are seven keys to writing Haiku.



Form: Your Haiku should have 3 lines with or without a seventeen syllable count. It should be one long breath.

Sitting on a branch eating –
Red berries, yellow,
Red breast, singing all alone.



Maths Talk

Maths number of the day - 46

- Write in words
- 10 more
- Partition
- Double
- Minus 10
- Halve
- Draw

Count in 2s to calculate how many eyes there are.



There are ___ eyes in total.

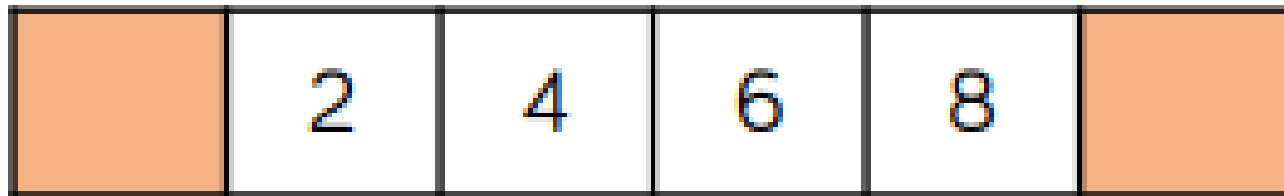
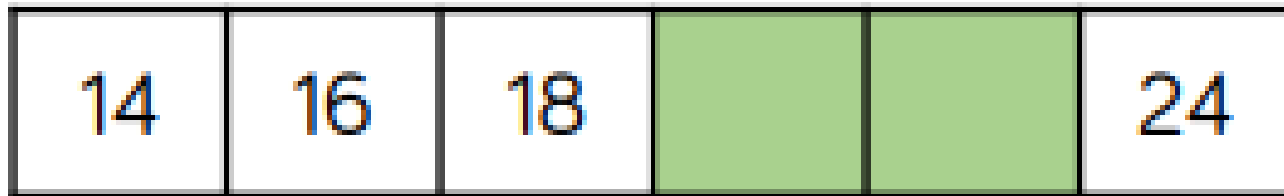

$$\underline{\quad} \times \underline{\quad} = \underline{\quad}$$

How many wheels are there on five bicycles?



If there are 14 wheels, how many bicycles are there?

Complete the number track.



Fill in the blanks.

$$3 \times \underline{\quad} = 6$$

$$\underline{\quad} \times 2 = 20$$


$$\underline{\quad} = 8 \times 2$$

Tommy says that $10 \times 2 = 22$

Is he correct?

Explain how you know.

Eva says,




Every number in the
2 times-table is even.


Is she correct? Explain your answer.

Reading for pleasure

Is Jesus inspiring because of his life story?

- If you were writing a book about someone, what important details would include? Collect ideas in pairs for some chapter outlines.
 - Although the Gospels say a lot about what Jesus said and did, there is no written description of him, and paintings were not done until maybe 150 years after his death. Why might this be?
 - Explain that all images of Jesus are influenced by the artist's experiences, beliefs and background.
-











- https://www.youtube.com/watch?v=j_3weVPH0-U