

Thursday 21st January 2021

Morning job – How many words can you make from the title

‘Mount Vesuvius’

For example: one, vein...

9:30 – 9:45 Wordsearch

9:45 - 10:30 English

10:30 – 10:50 Break

10:50 – 12 Maths

12 -1:00 Lunchtime

1:00 – 1:20 Reading for Pleasure

1:20 – 2:45 ICT

c o r e i b p v d e o r j e
 c v i o a m a b s g l i e k
 r a n a s a c t i v e d r f
 u s g v t n z p l e c t u a
 s o o l o t u e l a v a p m
 t g f a u l t i u f e s t a
 l x f o f e i j e u n c i g
 u u i l r l u o x g t o o m
 d o r m a n t q t o d n n a
 a m e c f y a n i e h d o i
 e y e a u h q u n t v u n e
 w v o l c a n o c a n i t a
 o p i m v i o b t w l t m k
 c r a t e r h a o c a s h o

volcano
 fault
 mantle
 ring of fire
 active

crust
 core
 sill
 lava
 dormant

extinct
 vent
 conduit
 eruption
 magma

crater
 ash

Planning a Diary Entry

In each box write notes to say what you will include in each paragraph of your diary entry. You could include what actions the character did, how they felt about what happened and any interesting words you may want to use.

Paragraph 1: Cloud of ash. What actions can you see, hear and smell? How do you feel?

Paragraph 2: Thunder, Lightning and Lava. What happens? Colours, sounds, heat, light? How do you feel?



Paragraph 3: Mount Vesuvius explodes. What can you see, hear? How do you feel?

Paragraph 4: Pompeii has gone. How do you feel?

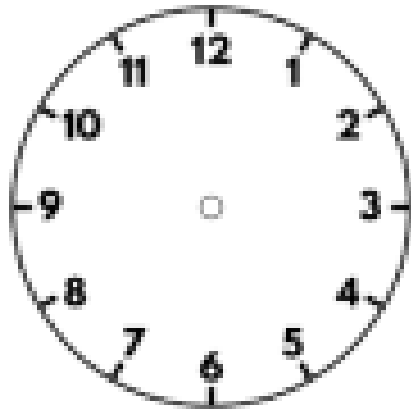
Maths – Talk about numbers

- <https://www.youtube.com/watch?v=nsScVF6Jo6A>

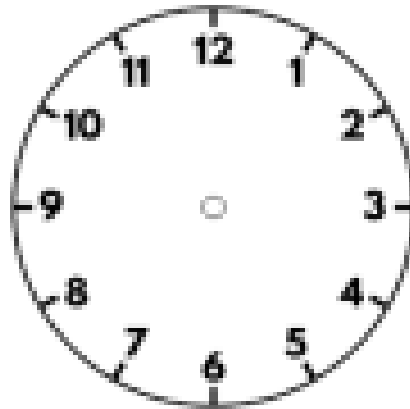
Maths – Number of the Day -742

- Write it in words
- One more
- Partition it
- The next odd number
- Ten more
- Round to the nearest ten
- The next even number
- One less
- Double it
- Ten less

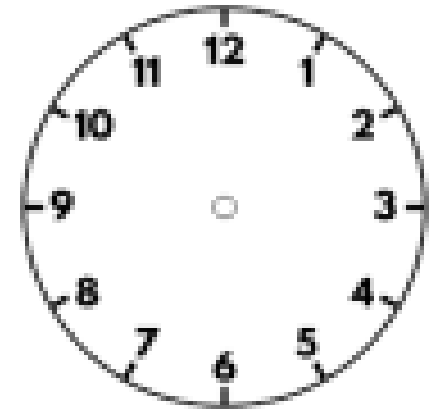
Draw the time on the clocks.



Four minutes to 4



24 minutes to 8



24 minutes past 8

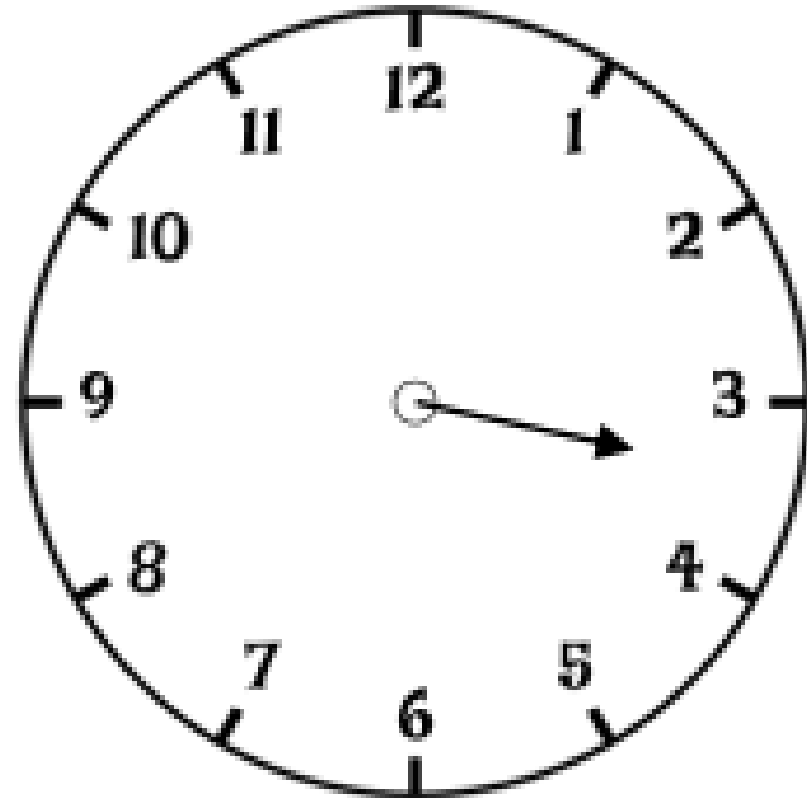
Dora is telling the time from an analogue clock.



The hour hand is pointing to XI
the minute hand is pointing to XII

What time is it?


This clock has lost its minute hand.
What time could it be?



Eva and Mo are having a race.

It takes Eva 3 and a half minutes to complete the race.

It takes Mo 3 minutes and 15 seconds.



I won because I got a higher time.

Is Eva correct?

Explain how you know.

Complete the table.

Time in minutes	Time in seconds
2 minutes	
	100 seconds
3 minutes 20 seconds	

Review last week's films

- Areas to improve?

