

Thursday 2nd July Year 3 Home Learning

1. English - Newspaper Reports.L.F- Key Features with SPaG focus.

Click on the link below to access the Oak National Academy on line lesson.

<https://classroom.thenational.academy/lessons/key-feature-spag-focus>

If you are unable to log on, complete the newspaper comprehension below.

Task 2 - English. Newspaper Comprehension.

THE DAILY NEWS

SHACKLETON SETS SAIL

Shackleton and his crew have finally launched The Endurance on route to Antarctica. They are planning to cross Antarctica via the South Pole.

The wooden ship is loaded with warm clothes, plenty of food with a long shelf life, and even a huge team of strong dogs to pull the sleds.

Before leaving, Shackleton said, "I have wanted to be an explorer since I was a boy and this is my dream come true."

Having moved from Ireland to London to be educated, Shackleton rejected his father's wishes to become a doctor. Instead he joined the merchant navy when he was 16 and qualified as a master mariner in 1898. He travelled widely but was keen to explore the poles.

"I know it's going to be hard," said a crew member, "but I'm so excited to be part of this adventure."



*Ernest Shackleton,
Captain of The Endurance*

Shackleton will have to navigate his ship through a thick ice pack before he is able to leave the ship and begin his exploration on foot.

It is a dangerous journey, but if Shackleton achieves his goal, he will go down in history.

Answer the following comprehension questions.

Set 1

1. Circle the features which appear in this newspaper article:

Headline

Picture

Caption

Introduction

Quotes

2. What is the name of the ship Shackleton and his crew plan to sail in?

.....
.....

3. What was the ship made from?

.....
.....

4. Where was the ship heading for?

.....
.....

5. What did Shackleton hope to achieve?

.....
.....

6. Why had they taken dogs with them?

.....
.....

7. Would you have liked to have been on the expedition? Why?

.....
.....
.....

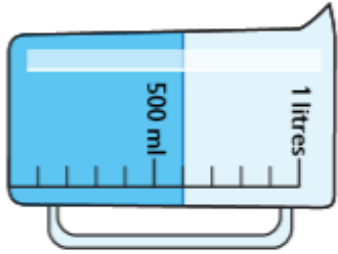
Task 3 Maths

Warm Up - <https://www.topmarks.co.uk/maths-games/hit-the-button>

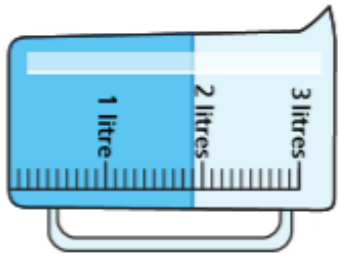
Measure capacity (2)



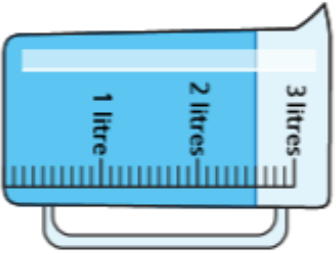
1 How much water is there in each jug?



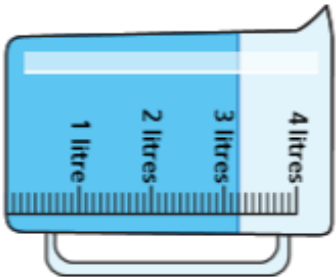
ml



l and ml



l and ml

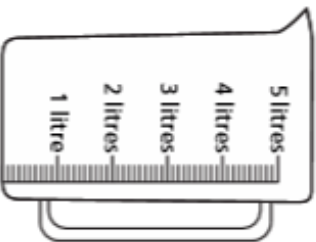
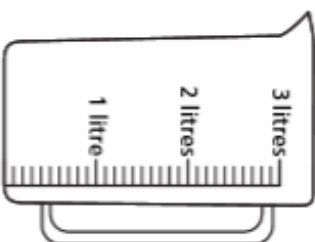
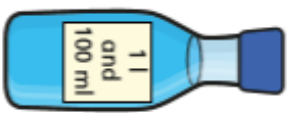
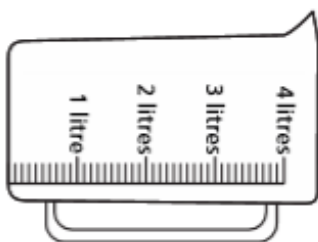
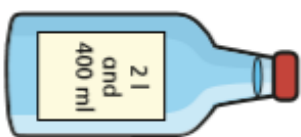


l and ml

2 The capacity of each bottle is shown on the label. Each bottle is full of liquid.

The bottles are emptied into jugs.

Draw a line on each jug to show where the liquid will reach.



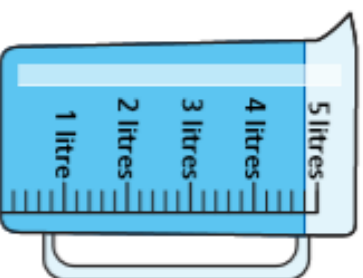
3 How much water is there in each container?

a)



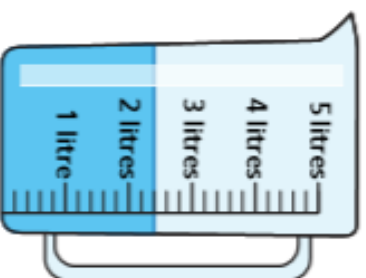
ml

c)



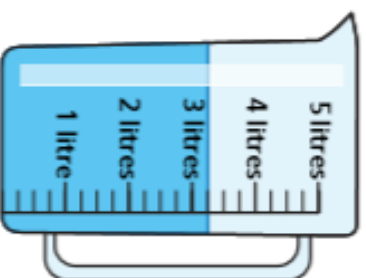
l and ml

b)



l and ml

d)



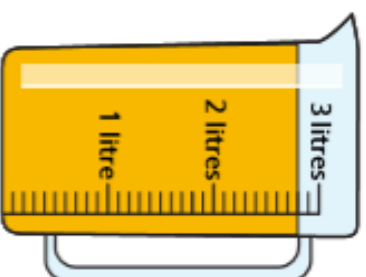
l and ml

How did you work out what each interval on the scales represents?

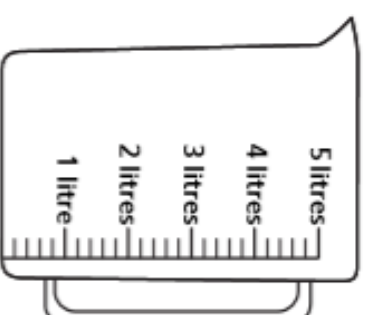


4 Mo has some orange juice in a jug. He pours it into another jug.

Draw a line on the jug to show where the orange juice will reach.



What do you notice?



5 Different bottles hold different amounts of liquids.



Dexter



Eva



Who has more liquid? Circle your answer.

Dexter

Eva

they have the same

Talk about it with a partner.

3. Physical Activity:

To get you active here is a link to Yorkshire Sport Foundation's PE lessons. Today's lesson is about throwing techniques (Lesson 19).

https://www.youtube.com/watch?v=tQO0kwCmmI&list=PLYGRaluWWTojV3An2WEgsQ4qGFy_91jDL&index=20

4. R.E - Hinduism

Hindus believe that **Brahman** (the one God) has three functions and these are shown by the three gods, **Shiva**, **Brahma** and **Vishnu**.

These three are sometimes shown as three heads merging into one and are known as the **Trimurti**.

Brahma is the **Creator** and source of all creation.

Vishnu is the **Preserver** and responsible for keeping all good things on earth.


Shiva is the **Destroyer** and is needed because some things are harmful and because change is necessary for the creation of new things.

The sacred sound **aum** is believed to be the first sound at the start of creation.


Brahma



Vishnu



Shiva



Choose a god from the Trimurti to draw and label. Can you find out any more information about them.