

Tuesday 5th January 2021

9:00 -9:15 Morning job – Practise your times tables

9:15 – 9:35 Handwriting

9:35 - 10:30 English

10:30 – 10:50 Break

10:50 – 12 Maths

12 -1:00 Lunchtime

1:00 – 1:20 Reading for Pleasure

1:20 – 2:45 Science

2:45 – 3:00 end of day catch up / share

Handwriting

ai ai

ai ai

ay ay

ey ey

mail mail

play play

grey grey

Complete the practise joins and write the words three times.

Challenge: Now write a sentence containing all three words.





Question time!

What has Geppetto created?

Why is he so surprised?

What is the puppet's name?

What do you think Geppetto will do next?

Do you think he has made anything magical before?

Can you make a list of all the things the woodcarver would normally make?

Do you have anything that has been carved out of wood in your house?

If you could carve something to come alive, what would it be?

Sentence challenge!

Can you make a list of emotions that Geppetto would be experiencing?

Can you then write a sentence starting with one of those emotions, and including some good adjectives?

E.g. Astonished, Geppetto gently raised his weathered hand and pulled on the long, thin threads that controlled the puppet's actions.

Alarmed, Geppetto inched backwards towards the door as a smooth, wooden face with two pale, blue eyes turned (on its own) to gaze at him.

Sick sentences!

These sentences are 'sick' and need your help to get better.

The man was amazed. The puppet looked at him. It was made out of wood. Its face moved.

Maths – Talk about numbers

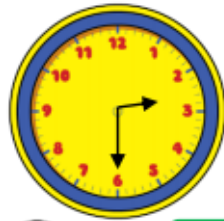
- https://www.youtube.com/watch?v=6yyz_OycV4A

Maths – Number of the Day - 507

- Write it in words
- One more
- Partition it
- The next odd number
- Ten more
- Round to the nearest ten
- The next even number
- One less
- Double it
- Ten less

What is time?

Problem solving



Who is telling the time correctly?



Dora

The time is half past 6



Amir

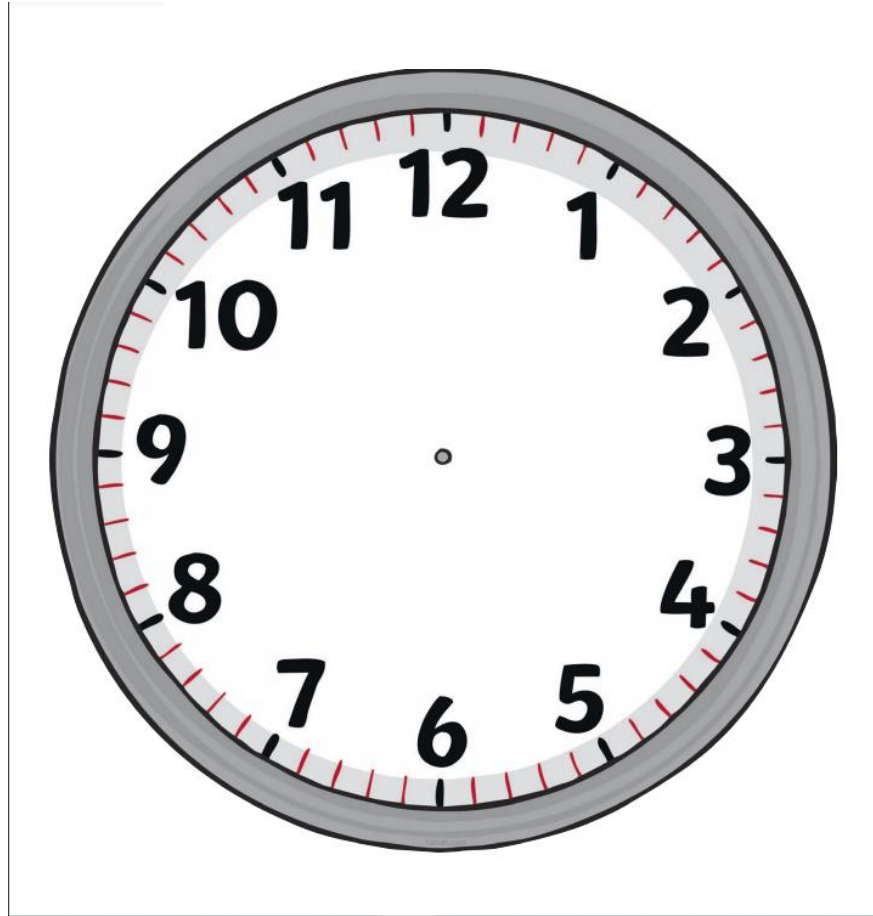
The time is half past 3





Alex




The time is half past 2

Can you spot the mistakes they've made?




 Complete the tables.

5 o'clock	
	

Half past 4	
1 o'clock	
	

It is half past 11 so the hour hand should be on the 11

Is Alex correct?
Explain your reasoning.



Oh no! The minute hand has fallen off the classroom clock!

Lunchtime is at 12:00

Have the children missed their lunchtime?

Reading for Pleasure

Science