

## Wednesday 1<sup>st</sup> July Year 3 Home Learning

### 1. English - Newspaper Reports.L.F- Identify the key features.

Click on the link below to access the Oak National Academy on line lesson.

<https://classroom.thenational.academy/lessons/read-the-example-and-identify-the-key-features>

If you are unable to log on, read the reports and match them to the headlines on the worksheet below.

### **Match the headlines with the report**



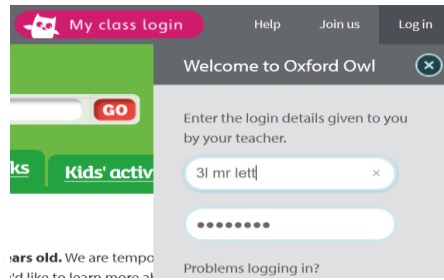
1	About ten thousand soldiers were seen marching up and down the hill near York.	A	Sheep Magically Disappeared.
2	It has been reported that Little Bo-peep cannot find her sheep. They seem to have magically disappeared. She has looked for them everywhere.	B	Rescued by Heroes
3	A peacock has been seen flying over <del>Adnitt</del> Adnitt Road. It was reported missing from Abington Park last week. It has created a lot of excitement around the Abington area.	C	Magic Pyramid
4	Jane and Ross are heroes to 84 year old Mrs. Bennett. "They saved my life," she said from her hospital bed.	D	Soldiers on the March
5	Dave thinks that there really is a monster living in Northampton. He has seen strange dark monster shapes near the River Nene.	E	Peacock excitement
6	A Scientist has been researching pyramids. He has discovered a pyramid with a magical entrance.	F	Nene Monster Scare!

**Reading** - Log on to Oxford Owl and read a book for ten minutes today.

<https://www.oxfordowl.co.uk/for-home/find-a-book/library-page/> - join free and gain free access to eBooks that you can read together online.

Our class log in is : 3l mr lett

Password : stimpson



## 2. Physical Activity:

To get you active here is a link to Yorkshire Sport Foundation's PE lessons. Today's lesson is called Reaction Wall (Lesson 18).


[https://www.youtube.com/watch?v=D\\_KaDUryDes&list=PLYGRaluWWTojV3An2WEgsQ4qGFy\\_91jDL&index=19](https://www.youtube.com/watch?v=D_KaDUryDes&list=PLYGRaluWWTojV3An2WEgsQ4qGFy_91jDL&index=19)

## Task 3 Maths

### Add and subtract mass

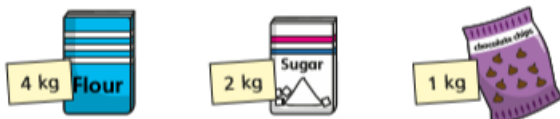
White Rose Maths

1 Teddy is measuring the weight of some fruit.



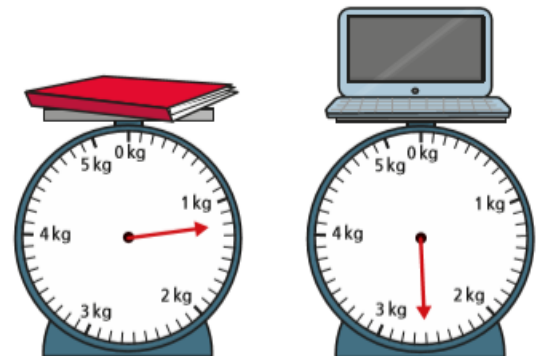
- a) What is the weight of the apple?  g
- b) What is the weight of the banana?  g
- c) Teddy puts both pieces of fruit on the same scale.  
What is the total weight of the apple and the banana?  g

2 Alex is measuring the weight of some ingredients.



What is the total weight of the ingredients?  kg

3 Ron is measuring the mass of some objects in the classroom.

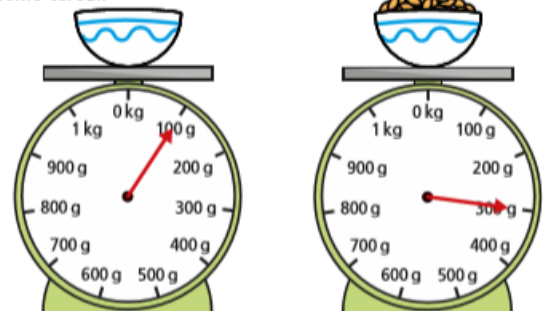


Ron puts both objects on the same scale.

What is the total mass of the objects?  kg and  g

4 Aisha is weighing out some cereal.

First she puts the bowl on the scales. Then she pours out some cereal.



What is the weight of the cereal in the bowl?  g

- 5 A dog weighs 8 kg and 200 g when it is 8 weeks old.  
The same dog weighs 12 kg and 900 g when it is 12 weeks old.  
What is the difference in the dog's weight between 8 and 12 weeks?

kg and  g

- 6 The mass of a tin is 450 g.  
The mass of a book is 300 g.



Draw books on the scales to balance the tins.



- 7 Complete the number sentences.

- a)  $1\text{ kg } 250\text{ g} + 5\text{ kg } 300\text{ g} = \text{  kg } \text{  g}$   
 b)  $3\text{ kg } 450\text{ g} + 8\text{ kg } 120\text{ g} = \text{  kg } \text{  g}$   
 c)  $15\text{ kg } 960\text{ g} - 11\text{ kg } 270\text{ g} = \text{  kg } \text{  g}$   
 d)  $36\text{ kg } 317\text{ g} - 21\text{ kg } 199\text{ g} = \text{  kg } \text{  g}$   
 e)  $1\text{ kg} - \text{  g} = 200\text{ g}$

- 8 Tommy and Rosie are working out the total weight of the box and the suitcase.



The total weight is 5 kg and 1,200 g.

Tommy

The total weight is 6 kg and 200 g.



Rosie

Who is correct? \_\_\_\_\_

Talk about it with a partner.

## 4. Music L.F- Pulse

Follow this link to Oak National Academy on line learning for today's music lesson.

<https://classroom.thenational.academy/lessons/pulse>

## Finally.

Optional Task -

Try to make the longest word you can using these nine letters:

A G E T L P O S M