

Year 1 Stimpson Avenue Academy Home Learning

Hello everyone!

We hope you are all well. Working from home can be difficult and boring at times and we know how much you must all be missing your friends. Please keep sending us photos of completed work - or other fun activities such as craft, walks with your family, cooking - please send photos of them to us. Our email addresses are david.braithwaite@stimpson.emat.uk and avril.gough@stimpson.emat.uk

Please make sure to include your child's name either in the email or on the work itself. Also, please email us if you have any other questions about the home learning.

Please click on the link below to catch up on all the stories the staff have been reading for everyone to watch.

https://www.youtube.com/channel/UCMK_s02lfZOIKYR_geR9HtQ/

Week beginning Monday 8th June

PE

Start this morning with a Mr Osborne PE session, we think he is much better than Joe Wicks! <https://stimpson.emat.uk/1637/pe-with-mr-osborne>

Maths

There is a video tutorial for each day this week, which can be found here.

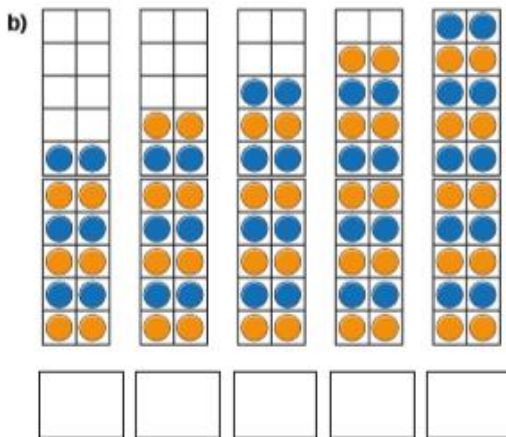
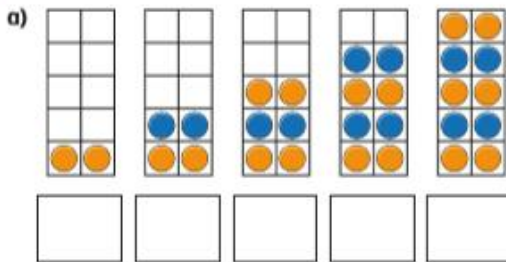
<https://whiterosemaths.com/homelearning/year-1> click on week 7 week beginning 8th June.

Lesson 1 -counting in 2's

Count in 2s

White
Rose
Maths

1 What are the numbers?



2 How many flowers are there?



There are flowers.

3 Circle 14 socks.

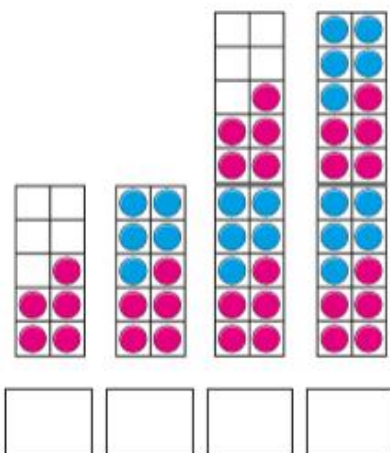


Lesson 2 - counting in 5's

Count in 5s

White
Rose
Maths

1 What are the numbers?




2 How many spots are there in total?

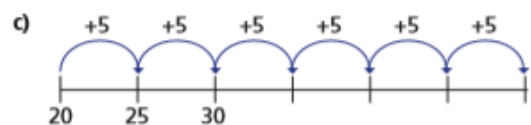


There are spots in total.

3 Colour 35 petals.



4 Fill in the missing numbers.



5 Mo counts up to 50 in 5s.

Eva counts up to 50 in 2s.

What numbers do they both say?

Can you spot a pattern?

Lesson 3 - counting in 10's

Count in 10s

White
Rose
Maths

1 How many muffins are there altogether?



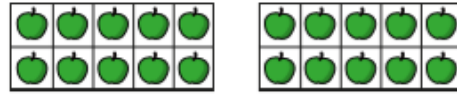
There are muffins on each tray.

There are trays.

There are muffins altogether.



2 How many apples are there altogether?



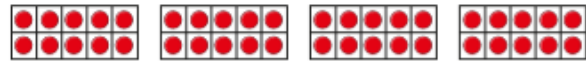
There are apples on each ten frame.

There are ten frames.

There are apples altogether.



3 How many counters are there altogether?



There are counters altogether.



Lesson 4 - Add equal groups

Add equal groups

White
Rose
Maths

1 Complete the sentences.



There are apples in each bag.

There are bags.

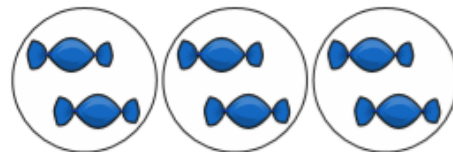
There are equal groups of

There are apples altogether.

$$\square + \square + \square + \square = \square$$



2 How many sweets are there?




$$\square + \square + \square = \square$$

There are sweets.



3 How many marbles are there?



$$\square + \square + \square = \square$$

There are marbles.



English

Reading

If you have a copy of *Hansel and Gretel* please read it, if not, please click on the link to watch a Youtube video and read along story. <https://www.youtube.com/watch?v=kSQo3DoleCA&safe=true>

Lesson 1

Choose your favourite part of the story and draw a picture and write about it.

Lesson 2

Write about your favourite character and draw a picture of them.

In addition to this, you can click on the following link

<https://www.bbc.co.uk/bitesize/dailylessons> choose the correct age tab and then complete the English lesson.

Handwriting

How

How

brown

down

town

out

about

mouth

sound

you

very

happy

funny

party

family

dizzy

smelly

silly

jolly

sunny

Phonics

Please practice your phonics every day!

<https://www.phonicsplay.co.uk/>

Phonics Play is a great website and is currently free to use!!

User name: march20 Password: home <https://www.teachyourmonstertoread.com/>

The Read Write Inc Youtube Channel has activities every

day of the week: https://www.youtube.com/channel/UCo7fbLgY2oA_cFCIq9GdxtQ

You could also use these great sites: <https://www.youtube.com/watch?v=s6OiU2h3sUI>

<https://www.youtube.com/watch?v=p7hRbrpq5Bo>

<https://www.bbc.co.uk/bitesize/topics/zf2yf4j>

<https://www.bbc.co.uk/bitesize/topics/zvq9bd>

Hansel and Gretel



Design a Gingerbread House



Woodland animals

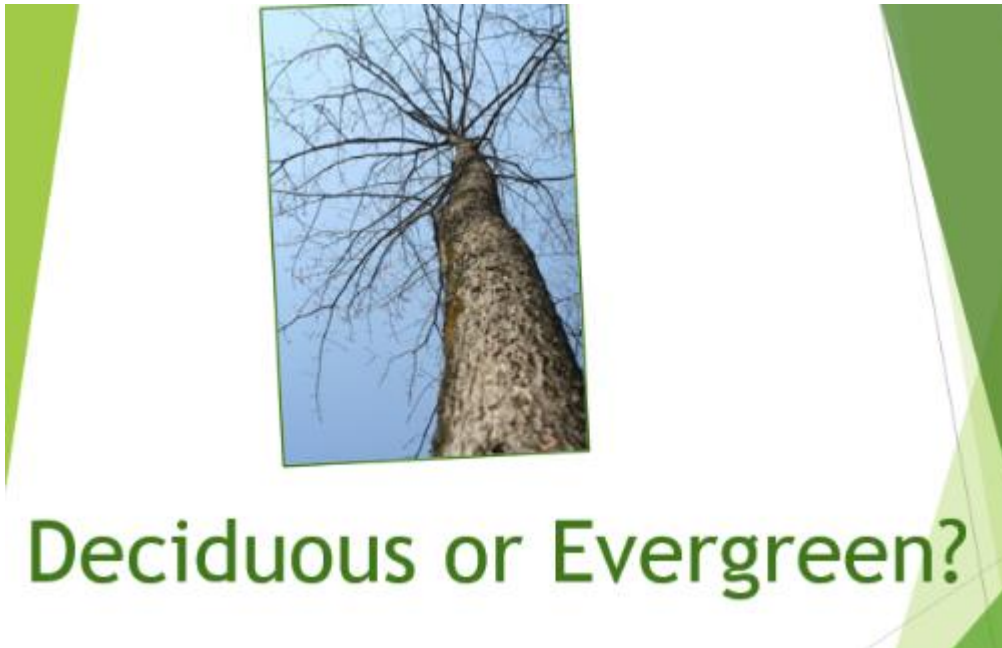
What woodland animals can you name? Try to identify each of these animals that might be found in the woods.

Name these woodland animals.



Trees

<https://www.twinkl.co.uk/go/resource/tgv2-sc-7-quick-facts-evergreen-and-deciduous-trees-video>



Can you draw and name some trees that are deciduous and evergreen?